



FICHE 2 : FRACTION ET PARTAGE (1)


1 Indique quelle fraction de chaque carré représente la partie colorée.




a.



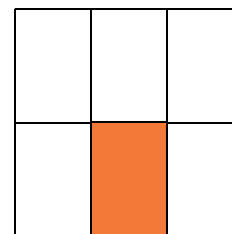
b.




c.



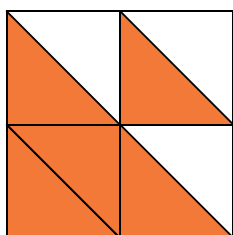
d.




e.




f.



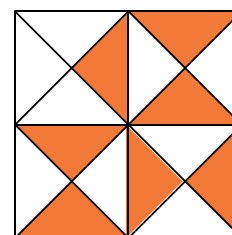
g.



h.

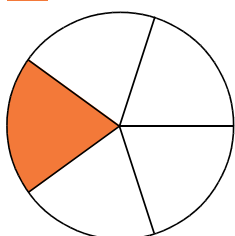


i.

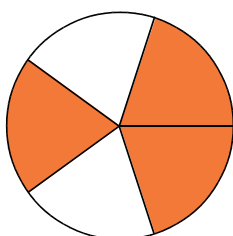


j.

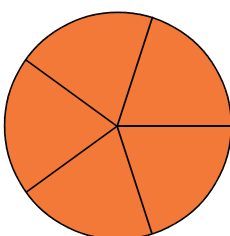
2 Indique quelle fraction de chaque disque représente la partie colorée.



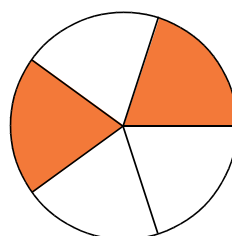
a.



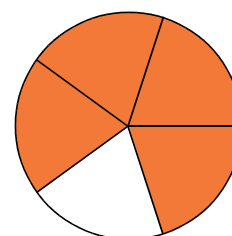
b.



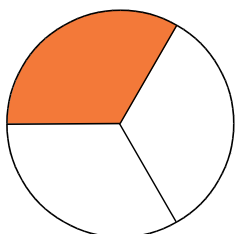
c.



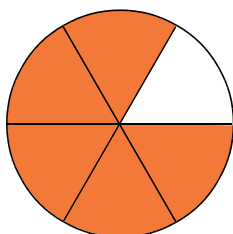
d.



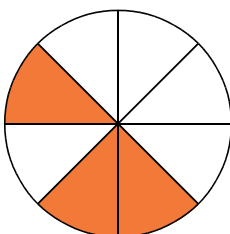
e.



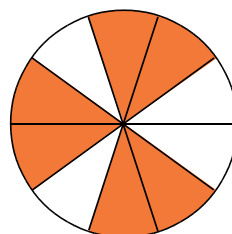
f.



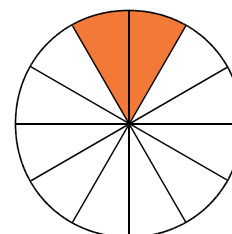
g.



h.



i.



j.

3 On considère ces six drapeaux. Complète le tableau en indiquant le pays dont la partie rouge du drapeau correspond à la fraction donnée.



Autriche



Chili



Colombie



Costa Rica



Lettonie



Samoa

Fraction	$\frac{1}{2}$	$\frac{1}{3}$	$\frac{2}{3}$	$\frac{1}{4}$	$\frac{3}{4}$	$\frac{4}{5}$
Pays						