



FICHE 2 : FRACTION ET PARTAGE (1)


1 Indique quelle fraction de chaque carré représente la partie colorée.




a.  $\frac{1}{2}$



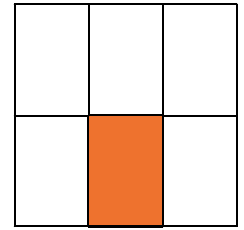
b.  $\frac{2}{3}$




c.  $\frac{2}{4}$



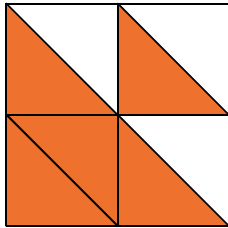
d.  $\frac{3}{4}$



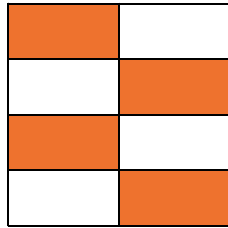
e.  $\frac{1}{6}$




f.  $\frac{4}{6}$



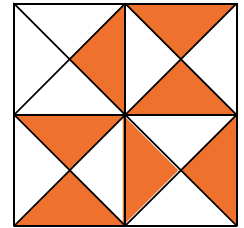
g.  $\frac{5}{8}$



h.  $\frac{4}{8}$

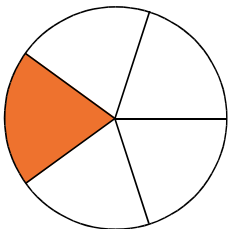


i.  $\frac{5}{9}$

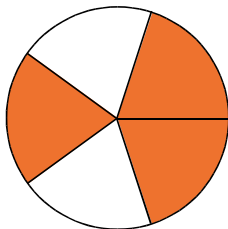


j.  $\frac{7}{16}$

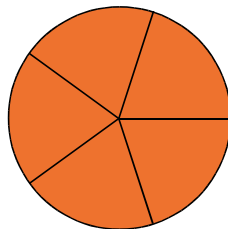
2 Indique quelle fraction de chaque disque représente la partie colorée.



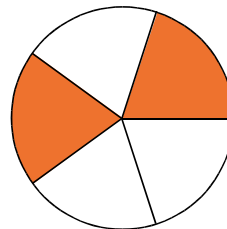
a.  $\frac{1}{5}$



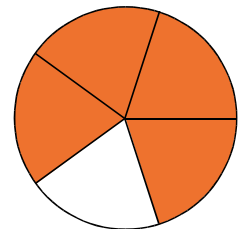
b.  $\frac{3}{5}$



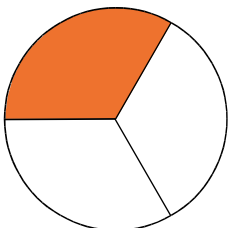
c.  $\frac{5}{5}$



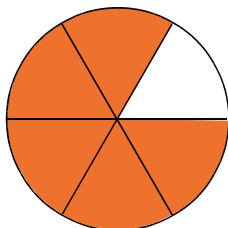
d.  $\frac{2}{5}$



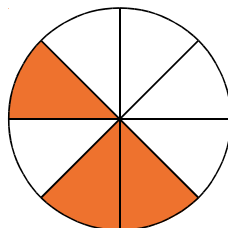
e.  $\frac{4}{5}$



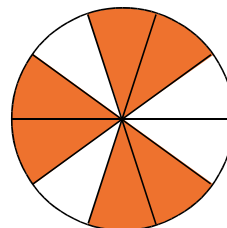
f.  $\frac{1}{3}$



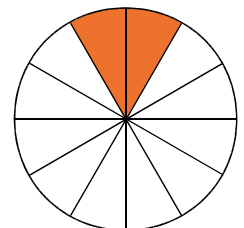
g.  $\frac{5}{6}$



h.  $\frac{3}{8}$



i.  $\frac{6}{10}$



j.  $\frac{2}{12}$

3 On considère ces six drapeaux. Complète le tableau en indiquant le pays dont la partie rouge du drapeau correspond à la fraction donnée.



	Autriche	Chili	Colombie	Costa Rica	Lettonie	Samoa
Fraction	$\frac{1}{2}$	$\frac{1}{3}$	$\frac{2}{3}$	$\frac{1}{4}$	$\frac{3}{4}$	$\frac{4}{5}$
Pays	Chili	Costa Rica	Autriche	Colombie	Samoa	Lettonie