


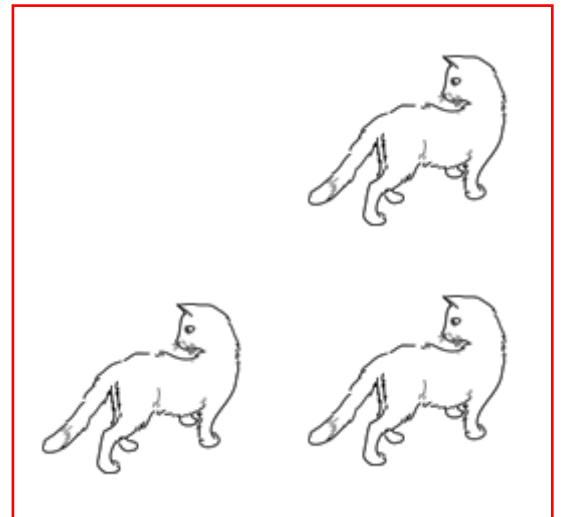
LES ADDITIONS



DANS LA BOÎTE IL Y A ____ ABEILLES.



DANS LA BOÎTE BLEUE
IL Y A ____ CHATS.




DANS LA BOÎTE ROUGE
IL Y A ____ CHATS.

DANS LES DEUX BOÎTES IL Y A ____ CHATS.

LES ADDITIONS




DANS LA BOÎTE BLEUE
IL Y A 2 SOLEILS.



DANS LA BOÎTE ROUGE
IL Y A 3 SOLEILS.

DANS LES DEUX BOÎTES IL Y A ___ SOLEILS.



DANS LA BOÎTE BLEUE
IL Y A 4 TRIANGLES.



DANS LA BOÎTE ROUGE
IL Y A 2 TRIANGLES.

DANS LES DEUX BOÎTES IL Y A ___ TRIANGLES

LES ADDITIONS

TOM A 3 BILLES DANS UNE POCHE.

TOM A 2 BILLES DANS L'AUTRE POCHE.

COMBIEN TOM A DE BILLES ? _____

J'AI 5 BILLES DANS UNE POCHE.

J'AI 1 BILLE DANS L'AUTRE POCHE.

COMBIEN AI-JE DE BILLES ? _____

LÉA A 2 BILLES DANS UNE POCHE.

LÉA A 4 BILLES DANS L'AUTRE POCHE.


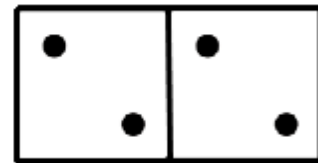

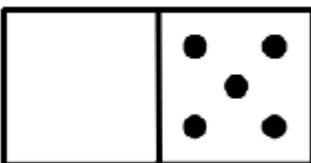

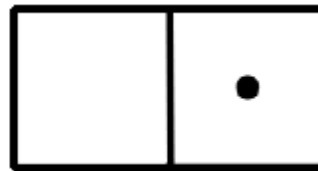

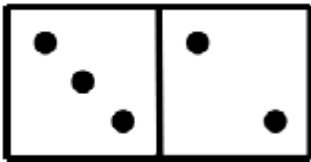

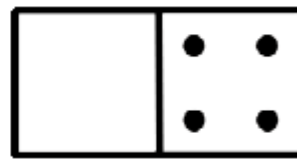

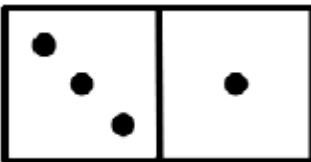

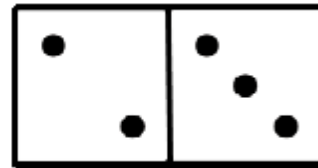

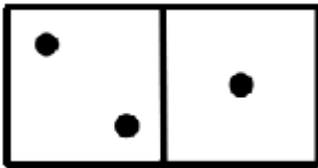

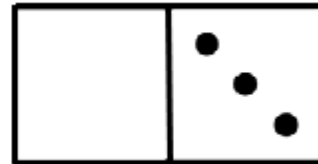

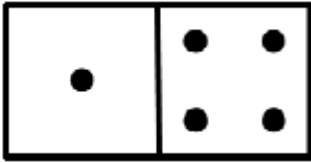

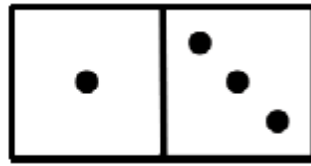

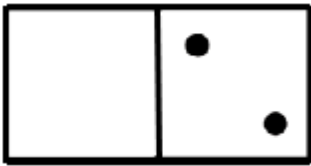

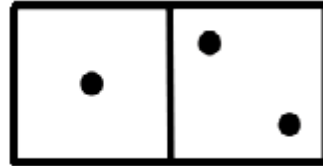

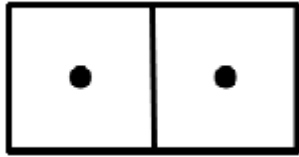
COMBIEN LÉA A DE BILLES ? _____

LUC A 3 BILLES DANS UNE POCHE.

LUC A 1 BILLE DANS L'AUTRE POCHE.

COMBIEN LUC A DE BILLES ? _____

LES ADDITIONS



LES ADDITIONS

RÉALISE LES ADDITIONS SUIVANTES :

$4 + 2 = \square$

$3 + 4 = \square$

$5 + 3 = \square$

$6 + 1 = \square$

$3 + 3 = \square$

$2 + 3 = \square$

$4 + 3 = \square$

$7 + 1 = \square$

$2 + 4 = \square$

$4 + 4 = \square$

$4 + 1 = \square$

$6 + 2 = \square$