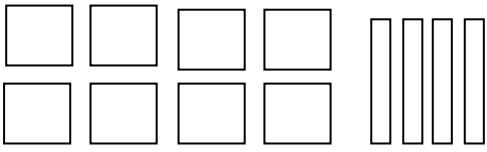

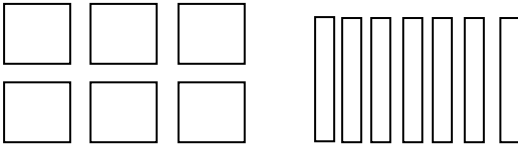

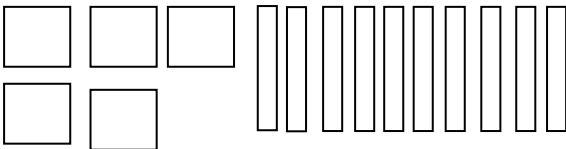



Maths, numération vendredi 12 juin

- **Ecrire les nombres donnés en chiffre :**

  .....

  .....

  .....

- **Ecrire le nombre correspondant en chiffres et en lettres :**

8c =

.....

9d =

.....

13d =

.....

1c et 17d =

.....

10d et 40u =

.....

- **Comparer des nombres :**

Observer les nombres suivants, et utiliser les signes < ou >

4c 3d 2u ..... 2c 23d 1u

2c 10d 5u ..... 2c 1d 50u

1c 1d 10u ..... 1c 10d 1u