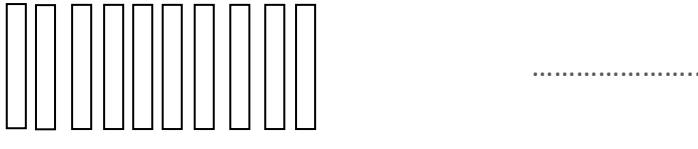
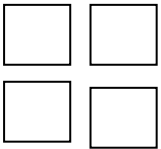
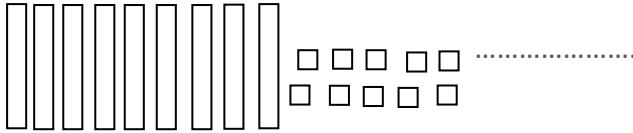
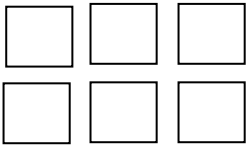
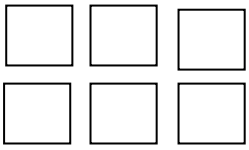


Maths, numération lundi 15 juin

- **Ecrire les nombres donnés en chiffre :**



- **Ecrire le nombre correspondant en chiffres et en lettres :**

7c =

.....

8d =

.....

11d =

.....

1c et 29d =

.....

31d et 50u =

.....

- **Comparer des nombres :**

Observer les nombres suivants, et utiliser les signes < ou >

1c 30d ..... 1c 30u

2c 5u ..... 2c 50u

1c 10d 10u ..... 1c 1d 1u